

Task 1: Calendar Math: Complete today's calendar activities.

CALENDAR MATH

Happy Wednesday Kindergarten!

Today is **Wednesday, April 8, 2020**

CALENDAR

1. These are spheres. **Circle** or **write** the word that best describes the size of the ball on the 5th day?




tiny, large, in-between

2. Can you find a sphere shape in your house?

(Write your answer on the line)

DAILY DEPOSITOR

3. How many dots are on this domino?

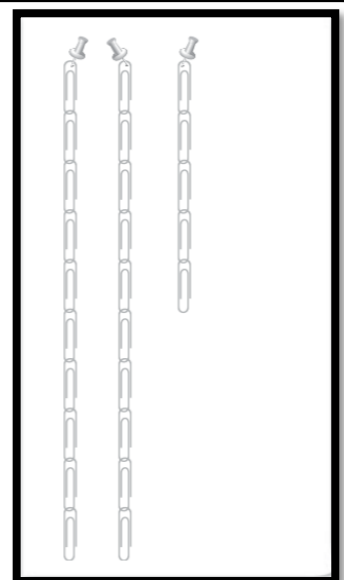


Write the number on the line.

COUNTING TAPE AND CLIP COLLECTION

4. How many clips do we have in our collection today?


Write the number on the line.



GRAPH

5. Which animal got the **MOST** votes?

(Circle or write your choice on the line.)



dog

cat

fish

6. How many votes are on our graph **in all**?

(Circle or write your choice on the line.)

15

12

16

Task 2: Lesson Introduction

Directions: Watch the instructional video about addition stories.

https://app.seesaw.me/pages/shared_item?item_id=item.ee8d8b2a-073c-4b1c-86cb-7219e625deed&share_token=s6V2sINpTpdBy5hfEDGXw&mode=share

Task 3: Learn

Directions: Watch the instructional video to learn about addition stories.


https://app.seesaw.me/pages/shared_item?item_id=item.f9b4765e-04af-499f-8e60-0028ebe1a81c&share_token=iFQlg42fT2u3ZxJqpcvuZg&mode=share



Task 4: Try

Directions: Complete the two “Try” problems below. Use the link below to watch the video for guidance and additional support while you complete the “Try” activity or use it to check your work after completing the two practice problems.

https://app.seesaw.me/pages/shared_item?item_id=item.822238b2-e6de-426e-8f3b-a0479029aa57&share_token=fu4z1w-QTh2_SpjE VW7Osw&mode=share

Complete
numbers 1-6



_____  are on top of the .

_____  is beside the .

There are _____  in all.



_____  are on the .

_____  are in the air.

There are _____  in all.

Task 5: Independent Activity


Directions: Complete the “Independent Practice” resource pages on your own. Then, turn this assignment into your teacher. Use each picture to make an addition story. Fill in each blank.




Complete
numbers 1-2


Adam builds 3 

Sarah builds _____ 

Adam and Sarah build _____  in all.



**Complete
numbers 3-5**

_____  are on the ground.

_____  join them.

There are _____  in all.



_____  are in the .

_____  are **not** in the .

There are _____  in all.

Complete numbers 4-6

Note to the Teacher: If there is anything that is unclear, write a note to me below so we can discuss it together during my office hours today or tomorrow.

Reminder: Practice writing your numbers!